

VIBETIME



All correct entries go into a draw at the end of the month to win a cool prize pack

NOVEMBER '11

INFANT K-2

Vibe Time is our numbers activity page.

This page is for everyone, but make sure you fill in the entry form below if you are in INFANTS K-2.

SUBTRACTION

1 How many caterpillars?

12 - 3 = 12 - 5 =

12 - 10 =

2 How many shoes?

7 - 5 = 7 - 3 =

7 - 0 =

3 If you had \$10 and you spent \$2 how much will you have left?

4 \$20 - \$6 =

5 If I started with 20 carrots then ate 12, how many would I have left?

- =

6 Circle the largest number

548 458 845 854

7 Circle the smallest number

912 920 902

8 Is the answer odd or even?

8 + 8 =

4 + 7 =

11 + 4 =

9 How many strawberries?

Circle one third of these.

÷ =

10 Complete the clocks.

Dance class begins at 5 o'clock.

:

Dance class ends at half past 6.

:

Dance class lasts for .

ENTER & WIN Teachers, photocopy entries welcome!

If you are in Infants K-2 complete ALL questions on this side and mail back to: VIBE TIME, PO BOX 1536, GOULBURN NSW 2580

Name School name

School Address

Phone Age Class

Does your school have a homework centre?



Entries in by
16 DECEMBER 2011

Vibe Time is operating under permits in NSW (LTPS/10/02750) and ACT (TP 10/01306.1). There is no requirement for a licence for the competition in NT, QLD, WA, SA, TAS and VIC. The Competition will be conducted according to the guidelines of these various State Gaming Authorities. Each month the winner receives a backpack full of goodies including a CD, pen, cap and T-shirts valued at \$50. The total value of prizes awarded annually is \$560.

VIBETIME

PRIMARY 3-6



All correct entries go into a draw at the end of the month to win a cool prize pack

NOVEMBER '11

Vibe Time is our numbers activity page.

This page is for everyone, but make sure you fill in the entry form below if you are in PRIMARY 3-6

1 Ruby went to the movies. She bought a movie ticket for \$12, a drink for \$6 and a large carton of popcorn. What other information is needed to find the total amount that Ruby spent at the movies?

- the title of the movie
- the cost of a drink
- the number of people at the movies
- the cost of a large carton of popcorn

2 Jon's packed lunch box has a mass of **1kg**. These objects were inside his lunch box.



120g



225g

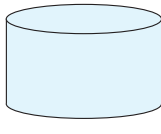
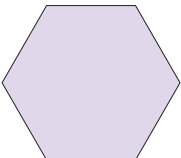
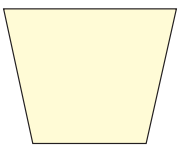


450g

What is the mass of Jon's empty lunch box?

grams

3 Which of these shapes is a hexagon?



4 The bass unit used to measure the mass of a desktop computer is

- centimetres
- kilograms
- litres
- kilometres

5 These lollies are made with equal layers.

What fraction of the layers are **not** black?



- 2/5
- 2/3
- 3/5

6 Chloe wrote down this number **579**. She added a zero after the 9. Her new number is

- 10 times larger than 579
- 10 times smaller than 579
- 100 times larger than 579
- 100 times smaller than 579

7 Jamee wants to find the answer to **3999 + 1838**. Which of these shows the way to get the same answer?

- $4000 + 1837$
- $4005 + 1830$
- $4000 + 1839$
- $4005 + 1850$

8 Maria was shopping for pineapples. Which one of these has the smallest mass?



3.5kg



3580g

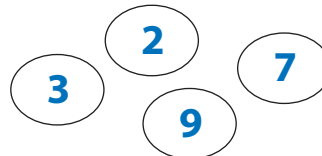


3.05kg



3870g

9 What is the largest whole number you can make using all of these numbers?



ENTER & WIN Teachers, photocopied entries welcome!

If you are in Primary 3-6 complete ALL questions on this side and mail back to: VIBE TIME, PO BOX 1536, GOULDBURN, NSW 2580

Name School name

School Address

Phone Age Class

Does your school have a homework centre?

Only entries from students in PRIMARY 3-6 will be marked. Turn over for INFANTS K-2

Entries in by **16 DECEMBER 2011**

Vibe Time is operating under permits in NSW (LTPS/10/02/50) and ACT (TP/10/01306.1). There is no requirement for a licence for the competition in NT, QLD, WA, SA, TAS and VIC. The Competition will be conducted according to the guidelines of these various State Gaming Authorities. Each month the winner receives a backpack full of goodies including a CD, pen, cap and T-shirts valued at \$50. The total value of prizes awarded annually is \$560.