

VIBETIME



All correct entries go into a draw at the end of the month to win a cool prize pack

AUGUST '11

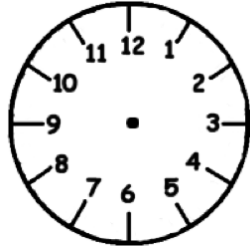
INFANT K-2

Vibe Time is our numbers activity page.

This page is for everyone, but make sure you fill in the entry form below if you are in INFANTS K-2.

TIME

1 What time is it?



o'clock Draw the hands to show 7 o'clock.

2 What time is it?



o'clock o'clock half-past

3 Draw what you usually do at these times in the week.

Saturday morning		Monday night	

4 Write the digital time.



5 Match

	half-past 7	
	half-past 11	
	half-past 4	
	half-past 2	
	2 o'clock	
	half-past 12	

6 Write the time in words.



7 Jeremy read a chapter of his book in an hour. He started reading at 10:30. What time did he finish the chapter?



ENTER & WIN

If you are in Infants K-2 complete ALL questions on this side and mail back to: VIBE TIME, PO BOX 1536, GOULBURN NSW 2580

Name School name

School Address

Phone Age Class

Does your school have a homework centre?

TEACHERS
PHOTOCOPY ENTRIES WELCOME

Only entries from students in INFANTS K-2 will be marked. Turn over for PRIMARY 3-6

Entries in by
SEPTEMBER 23, 2011

Vibe Time is operating under permits in NSW (LTPS/10/02750) and ACT (TP 10/01306.1). There is no requirement for a licence for the competition in NT, QLD, WA, SA, TAS and VIC. The Competition will be conducted according to the guidelines of these various State Gaming Authorities. Each month the winner receives a backpack full of goodies including a CD, pen, cap and T-shirts valued at \$50. The total value of prizes awarded annually is \$560.

VIBETIME



All correct entries go into a draw at the end of the month to win a cool prize pack

AUGUST '11

PRIMARY 3-6

Vibe Time is our numbers activity page.

This page is for everyone, but make sure you fill in the entry form below if you are in PRIMARY 3-6

1 Year 5 planted flower seeds in each pot. This picture shows how many plants grew in the pots.

What fraction of the seeds grew?

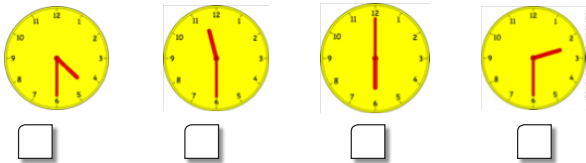
- 3 out of 8
 8 out of 3
 6 out of 8
 8 out of 6



2 Look at these numbers. How many of these numbers have remainders when divided by 7?

- 77 17 35 21 56 27
 2 3 4 5

3 Jeremy read a chapter of his book in an hour. He started reading at 1:30. What time did he finish the chapter?



4 Colour three cards that add up to 18.



5 Megan's packed lunchbox has a mass of 1kg. These objects are inside her lunchbox.



What is the mass of Megan's empty lunchbox?

grams

6 I am a solid object.
 I have a round base.
 I have one curved surface.
 I have one vortex.

What object am I?

- cone sphere
 cylinder square pyramid

7 Circle the coin that is equal in value to four 5 cent coins.



8 Chloe wrote down this number 579. She added a zero after the 9. Her new number is

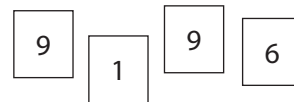
- 10 times larger than 579
 10 times smaller than 579
 100 times larger than 579
 100 times smaller than 579

9 Aunty Minny's clock looks like this. Which one of these shows the same time as Aunty Minny's clock?



- 10:05 10:10 10:15

10 What is the smallest whole number you can make using all of these numbers?



Write your answer in the box

ENTER & WIN

If you are in Primary 3-6 complete ALL questions on this side and mail back to: VIBE TIME, PO BOX 1536, GOULBURN NSW 2580

Name School name

School Address

Phone Age Class

Does your school have a homework centre?

TEACHERS
PHOTOCOPY ENTRIES WELCOME

Only entries from students in PRIMARY 3-6 will be marked. Turn over for INFANTS K-2

Entries in by
SEPTEMBER 23,
2011

Vibe Time is operating under permits in NSW (OTPS 10/02730) and ACT (TP 10/01505.). There is no requirement for a licence for the competition in NT, QLD, WA, SA, TAS and VIC. The Competition will be conducted according to the guidelines of these various State Gaming Authorities. Each month the winner receives a backpack full of goodies including a CD, pen, cap and T-shirts valued at \$50. The total value of prizes awarded annually is \$500.